



How Many?

Subject: Mathematics Class: KG - 1

Name:

4

Count the number of the given objects and circle the correct number.



1

2



1

2



1

2



1

2



1

2



1

2



Front and Back

Subject: Mathematics Class: KG - 1

Name:

6

Look at the pictures of a joker. Colour his front side in red and his back side in green.





Count and Colour

Subject: Mathematics Class: KG - I

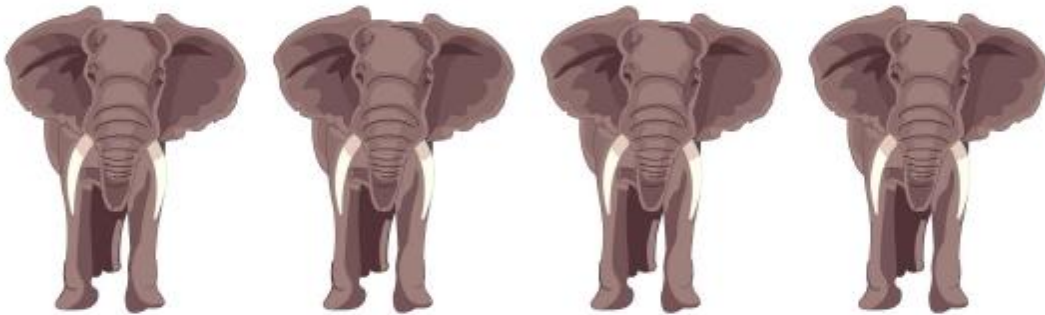
Name:

11

Colour the number box that matches with the number of the given objects.



1	2	3	4	5
---	---	---	---	---



1	2	3	4	5
---	---	---	---	---



1	2	3	4	5
---	---	---	---	---




Number Sequences

Subject: Mathematics Class: KG - I

Name: _____

Write the missing number in each set.

14





Fruit Shopping



The elephant has gone to the market to buy some fruits. Read the list and circle the correct number of fruits.

16



Paste
Sticker
Here



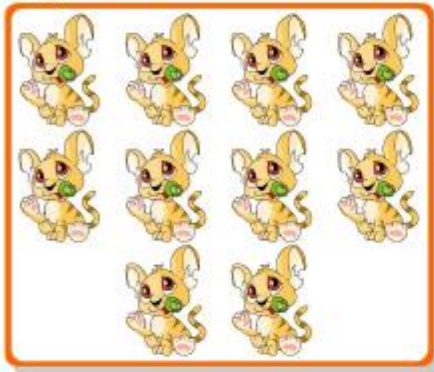
Be a Counting Master

Subject: Mathematics Class: KG - 1

Name:

27

Count the number of objects in each set and circle the correct number.



7 10 8



6 5 9



2 4 8



9 6 7